
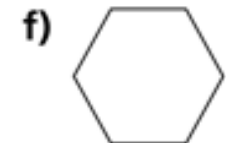
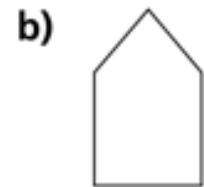
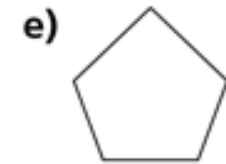
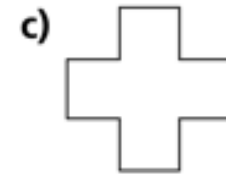


# Symmetry

Tick the shapes that have a line of symmetry



Draw the vertical line of symmetry on each shape.



Annie is drawing a vertical line of symmetry on some shapes.

Tick the shapes that have a correct line of symmetry.

