



5 x table


Match the picture to the times-table fact.




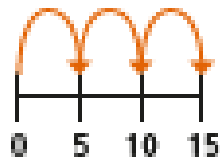
3×5



2×5




1×5

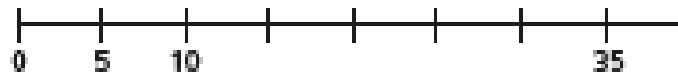


5×5

Draw a picture to show 4×5



Complete the number line.



b) Which times-table does the number line show?

Tick your answer.

1 times-table

2 times-table

5 times-table

Complete the number sentences.

a) $5 \times 5 = \square$

f) $\square = 11 \times 5$

b) $\square = 9 \times 5$

g) $5 \times \square = 5$

c) $5 \times 6 = \square$

h) $5 \times 0 = \square$

d) $5 \times \square = 40$

i) $10 = 5 \times \square$

e) $35 = \square \times 5$

j) $\square \times 5 = 60$

How much money does Ron have?



Complete the multiplication.

$\square \times \square = \square$

Ron has \square p.