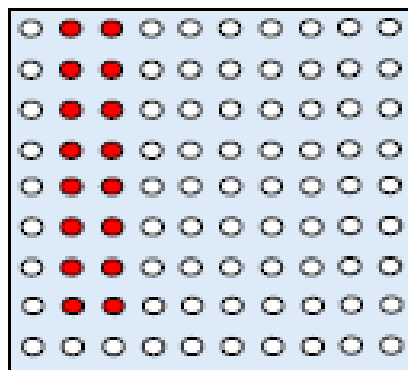



Working towards the expected standard:
counting in twos from 0 and use this to solve problems

How many have been shaded in? Explain how you counted them.



Draw a picture and write a number sentence to show your answer.

How many legs will 4 birds have?



Draw a picture and write a number sentence to show your answer.

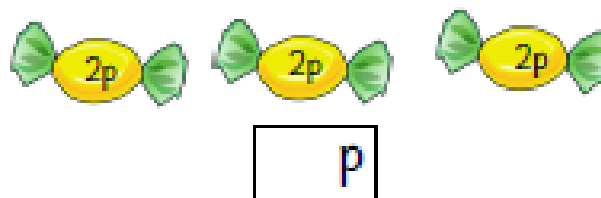
How many socks will 4 children need?



How much money is here?



Sweets cost 2p each. How much will 3 sweets cost?



Sweets cost 2p each. How much will 5 sweets cost? Draw a picture to show this.



How many eyes do 6 children have?



How many eyes will 8 children have? Draw a picture to show this.