

Number Shape Addition to 20

Use the number shapes to work out the answers to each addition question.

$$\begin{array}{|c|} \hline \text{10} \\ \hline \end{array} + \begin{array}{|c|} \hline \text{2} \\ \hline \end{array} = \square$$




$$\begin{array}{|c|} \hline \text{10} \\ \hline \end{array} + \begin{array}{|c|} \hline \text{3} \\ \hline \end{array} = \square$$




$$\begin{array}{|c|} \hline \text{7} \\ \hline \end{array} + \begin{array}{|c|} \hline \text{4} \\ \hline \end{array} = \square$$


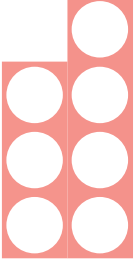

$$\begin{array}{|c|} \hline \text{11} \\ \hline \end{array} + \begin{array}{|c|} \hline \text{5} \\ \hline \end{array} = \square$$




$$\begin{array}{|c|} \hline \text{12} \\ \hline \end{array} + \begin{array}{|c|} \hline \text{1} \\ \hline \end{array} = \square$$




$$\begin{array}{|c|} \hline \text{10} \\ \hline \end{array} + \begin{array}{|c|} \hline \text{2} \\ \hline \end{array} = \square$$




 $+$  $=$ 




 $+$  $=$ 

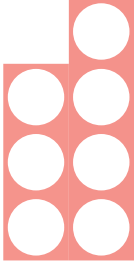


 $+$  $=$ 




 $+$  $=$ 




 $+$  $=$ 




 $+$  $=$ 



 $+$  $=$ 

 $+$  $=$ 

 $+$  $=$ 

 $+$  $=$ 

 $+$  $=$ 

 $+$  $=$ 