

# THANKS FOR NOT PRINTING THIS PAGE!



Simply print from page 2 in your printing options, to avoid wasted paper and ink.

To find out more visit [www.twinkl.co.uk/eco](http://www.twinkl.co.uk/eco)



## Thanks for downloading and welcome to the twinkl family!

### If you love our resources, you'll love premium!

- Save valuable time- we know how precious time can be, so we've spent thousands of hours creating lovely resources, leaving you to focus on what's most important.
- All the tools and materials you will need to create an amazing learning environment for your little stars!
- The largest collection of premium resources on the web at less than 1p per resource!
- Find out more about Twinkl premium at [www.twinkl.co.uk/premium](http://www.twinkl.co.uk/premium)



### How to change the print size of this resource

- In your PDF reader, click the 'File' menu
- Select 'Print'
- Click the box next to 'Print Scaling' and select 'Multiple Pages Per Sheet'
- You will now have various options, which will enable you to print several pages on just one sheet of paper.

### A brief word about copyright...

By downloading this resource, you agree to the following:



Scan QR Code



You may use this resource for personal and/or classroom use only. We're more than happy for you to keep your own backup copy though.

In order to support us, we ask that you always acknowledge [www.twinkl.co.uk](http://www.twinkl.co.uk) as the source of the resource. If you love these resources, why not let others know about Twinkl?

You must not reproduce or share this resource with others in any form. They are more than welcome to download the resource directly from us.



You must not host or in any other way share our resources directly with others, without our prior written permission.

We also ask that this product is not used for commercial purposes and also that you do not alter the digital versions of our products in any way.

**We hope you enjoy the resource and we'll see you very soon! x**



## MATHS CHALLENGE

John picked 12 flowers for his mum,  
and Sarah picked 17 for her mum.

Who picked the **most** flowers?



twinkl.co.uk

## MATHS CHALLENGE

Zoo A has 9 pandas. Zoo B has 11 pandas.

Which zoo has the most pandas?



twinkl.co.uk

## MATHS CHALLENGE



Adam ate 21 grapes. Sindhu ate 23.

Did Sindhu eat more or  
less grapes than Adam?

twinkl.co.uk

## MATHS CHALLENGE

Zoe baked 14 cupcakes and Darcie baked 19.

Who baked more?

How do you know which number is more?



twinkl.co.uk

## MATHS CHALLENGE

In a competition to find the most Easter eggs, Isaac found 23 and Aziz found 31.

Who won the competition?




twinkl.co.uk

## MATHS CHALLENGE

Jayden counted 41 bees in the school garden, and 14 ladybirds.

Did he spot more ladybirds or bees?



twinkl.co.uk

## MATHS CHALLENGE

Peter scored 34 points in the game, Sean scored 41 and Emma scored 29.

Who scored the most?

Who scored the least?

twinkl.co.uk

## MATHS CHALLENGE

Class 1 has 31 children. Class 2 has 28 children.  
Class 3 has 33 children.

Which class has the most children?

Does class 2 have more or less children than class 1?

twinkl.co.uk



## MATHS CHALLENGE

Ashton spent 63p at the shop, Wei Wei spent 58p and Rebecca spent 72p.

Who spent the most money?

Who spent the least money?


twinkl.co.uk



## MATHS CHALLENGE

The farmer kept 97 sheep and 88 cows in a field.

Were there more sheep or cows?

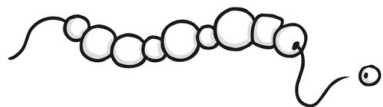


twinkl.co.uk

## MATHS CHALLENGE

Abi had 75 orange beads, 83 blue beads and 91 purple beads to make a necklace with.

What colour did she have the least of?



twinkl.co.uk

## MATHS CHALLENGE

The grocers shop ordered 81 oranges, 97 bananas, 100 apples and 89 melons.

Which fruit did they order the most of?

How do you know which number is more?

twinkl.co.uk