

Greater than and less than

Put < or > between the number pairs below.

a) 12 15

b) 30 22

c) 100 91

d) 46 41

e) $2+10$ 18

f) $6+4$ 46

g) 92 $22+7$

h) 22 20






i) $9+61$ 67

j) 25 $30+3$

k) 30 $21+9$

l) 221 111

Great! Now try with pictures.



Add a number in the spaces below to make the problem correct.

a) $22 <$

b) $14 >$

c) $82 <$

d) $97 >$

e) $17 <$

f) $28 >$

g) $99 <$

h) $33 >$

i) $50 >$

j) $66 <$

k) $76 >$

l) $52 <$

m) $60 >$

n) $72 <$

o) $4 >$

p) $81 <$