

1

Count and write the number of cars in the car park.

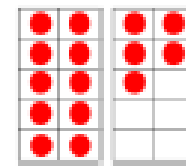




There are ..... cars in the car park.

2

What numbers are represented below?

Write your answer in numerals and words.



3

Match the numerals to the words.

17

48

38

70

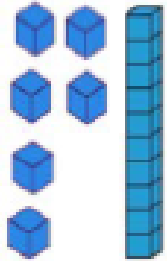
Thirty eight

Seventy


Forty eight

Seventeen

Tom says he has 61  
Is he correct?  
Explain your reasoning



Freddy rolls two dice.  
One dice shows a 6.  
What could his total be?  
Write your answers in words.



How many dots of one die?  
How did you count the dots?  
How many dots on a nine sided die?

Each bag contains 10 cookies.



How many cookies are there altogether?

Write your answers in numerals and words.

What strategy did you use?

Did your partner use a different method?

What is the best strategy to use

